

pp

Time: Monday

1a 4.10

b 3.00

c 5.55

d 2.20

e 2.55

2a 3.31

b 8.29

c 9.14

d 10.17

e 10.47

3a

4.01 P

4.11

11.22

11.32

3.06

3.16

7.29

7.39

4.59

5.09

(i)

(ii)

# Minute by minute

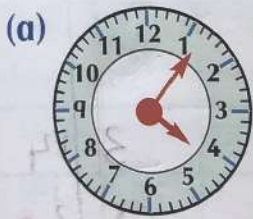
Example



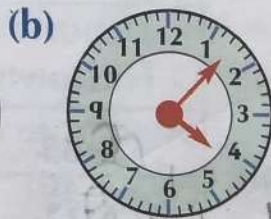
These two watches show **6 minutes past 7** or **just after five past 7**.



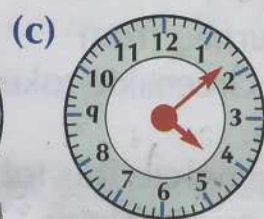
1. Write the digital times for each of these clocks.



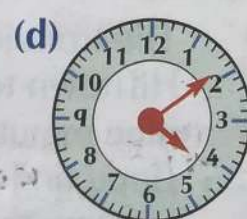
4:06



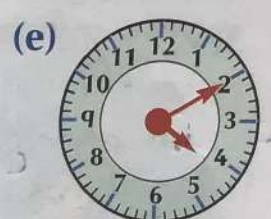
4:07



4:08

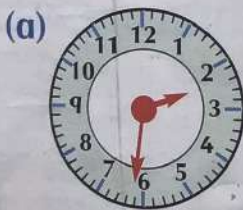


4:09

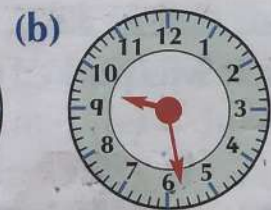


4:10

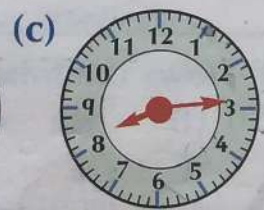
2. Write the digital times for each of these clocks.



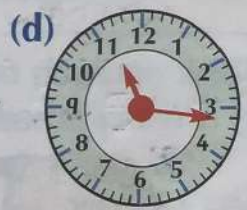
2:31



9:28



8:14



11:16



12:46

Now write the times that are 15 minutes later than each of the above times.

2:46

9:43

8:29

11:31

1:01

3. Match the digital times with the clocks.

(a) 10:23

(b) 3:01

(c) 8:59

(d) 6:53

(e) 12:09

a 3

b 4

c 5

d 1

e 2



No.

1

2

3

4

5



PTL

Tuesday

a	8.07
b	8.17
c	8.46
d	8.58
e	9.01
2a	7.58
b	7.38
c	8.02
d	8.03
e	8.05

b	Car	C
c	Car	A
d	Car	C
e	Car	B
5a	Car	C
	Car	E
	Car	A
	Car	D
	Car	B

3. Depts.

Arrives.

3.05	3.14
5.11	5.20
6.22	6.31
7.45	7.54
8.54	9.03

4a 10.40

10.42

9.32

10.15

10.35

P150

Thursday period

5a	hrs	num
1	59	

b	1	43
---	---	----

c	3	55
---	---	----

d	4	55
---	---	----

e	4	34
---	---	----

f	3	58
---	---	----

g	4	53
---	---	----

2a

hrs	num
2	04

b	4	13
---	---	----

c	5	25
---	---	----

d	5	10
---	---	----

e	3	54
---	---	----

f	2	19
---	---	----

g	6	03
---	---	----



1950 60 mins = 1 hr.

Wednesday

1a 65 mins = 1 hr 5 mins.

4. left house. 11.05

b 75 mins = 1 hr 15 mins.

arrived at shop 11.10

c 80 mins = 1 hr 20 mins.

left shop 11.13

d 100 mins = 1 hr 40 mins.

left friends 11.20

e 78 mins = 1 hr 18 mins.

arrived home 11.25.

2a 70 mins.

\* 20 mins away from

85 mins.

105 mins.

118 mins.

120 mins.

135 mins.

3a 90 mins.

b 75 mins.

c 105 mins.

d 150 mins.

e 72 mins.

arrived home.

Friday

P152

	hrs	mins
4a.	1	35
b	1	15
c	1	50
d	2	45
e	2	27
f	1	47

P153

1.	47 mins.
2.	15 mins.
3a	1 hr 40 mins.
b.	2 hr 20 mins
c	53 mins.
d	2 hr 03 mins.
e	1 hr 10 mins
4.	4 hr 15 mins.
5.	10:05
6.	12:28.