

Test 55



1. Emma had a 5 euro note and bought a tea-set for €2.99.

What change did she get?

2. If ham costs €5 per $\frac{1}{2}$ kg, what will 250g cost?

3. Which angles are greater (bigger) than right angles?
(There are two)



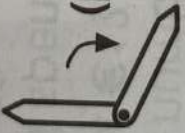
(a)



(b)



(c)



(d)

4. Una has 175 stamps but this is 50 less than Darren.

How many stamps has Darren?

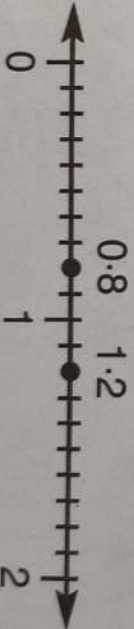
5. What is the missing letter: A, C, E, G, ___?

6. How many hours of the day have gone at midday?

7. A box of chocolates weighs 1kg.

If the empty box weighs 150g, what weight are the chocolates?

8. Take 0.8 from 1.2.



9.

2€

50c

50c

20c

= €

10. Is a rhombus a parallelogram?

Yes

Answer

1. €2.01

2. €2.50

3. (b)(d)

4. 225

5. I

6. 12

7. 850g

8. 0.4

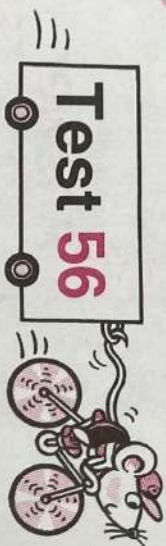
9. €3.20

10. Yes

Score

9. 2€ 50c 50c 20c = 1€
10. Is a rhombus a parallelogram? *Yes*

Score



1. What three coins make €1.70?
2. How many hours in a week?
3. Michelle bought a pot of jam in the shop. She gave in a 2€ coin and got 55c change. What price was the jam?
4. $2 - 1.5 = 0.\square$
5. What number is halfway between 24 and 34?
6. If today is Monday what day was it six days ago?
7. Sixty seconds make 1 minute.
How many seconds in $1\frac{1}{2}$ minutes?
8. Complete this magic square.

13	5	9
5	9	13
9	13	5

27

9. 0.8 of €1 = \square c
10. A glass holds 250ml of water.
How many millilitres are there in two glasses?

Answer

1. $€1, 50\text{c}, 20\text{c}$
2. 168
3. $€1.45$
4. 0.5
5. 29
6. *Tuesday*
7. 90
8. 27
9. 80c
10. 500ml

Score

Test 57



- Four bars of soap weigh 600g. What does 1 bar weigh?
- Fill in the multiplication square.

X	5	10
8	40	80
9	45	90
10	50	100

Answer

- 150g
- 600
- 8
- €4
- H
- 20
- 32
- 0.8, 1.5, 2
- 6



Equilateral Triangle

Score

--


Test 58



- What must I add to 1.2 to make 2?
- If 3 bikes cost 45 cent, what is the cost of one?
- $6 \times 6 = \square \times 9$
- Which does not belong?
 -
 -
 -
 -
- $2 \times 2 \times 2 = 8$. What is the value of $3 \times 3 \times 3$?
- Take 300 from three thousand three hundred and thirty.
- What change will I get from €2 if I buy two 'Choc Ices' at 55c each?
- This magic square adds up to 27 in each direction. Complete.

9	8	10
10	9	8
8	10	9

- A tin of biscuits weighs 2kg. If the empty tin weighs 300g, what weight are the biscuits?
- Choose a pair of lines which are parallel to each other in this rhombus.
(A and B, A and C, B and C, B and D)



Answer

- 0.8
- 15c
- 4
- (c)
- 27
- 3030
- 90c
-
- 1kg 700g (170g)
- A and C or B and D

Score