





Test 85

Weight

1. How many grammes are there in $\frac{1}{2}$ kg?
2. What must be added to 650g to make 1kg?
3. Write 1.075kg as grammes.
4.  How much would one kg of grapes cost if 250g cost €1.20?
5. 750 grammes of tomatoes cost €2.40.
How much should 1kg of tomatoes cost? 
6. One parcel weighs 2.8kg. Another weighs 2350g.
How much heavier is one parcel than the other?
7.  How much would 2kg of mushrooms cost if 400g cost €2.08?
8. How many times is 300g contained in 2.4kg?
9. How many bags, each weighing 500g, can be filled from a container holding 4.5kg?
10.  What change would I have from €5.00 if I bought 2.4kg of apples at €0.80 per 400g?

Answers ✓/✗

1.

2.

3.

4.

5.

6.

7.





8.

9.

10.

Total ✓

Test 97 Capacity

- How many millilitres are there in $\frac{1}{4}$ of a litre?
- What must be added to 830ml to make a litre?
-  A bottle can hold 300ml.
How many bottles can be filled from 1.5 litres?
- Write 1.08 litres as millilitres.
- How much for a litre of cream if 250ml of cream costs €1.40? 
- How much for $2\frac{1}{2}$ litres of oil if the price of the oil is €2.20 per 500ml? 
- How many times can a 200ml glass be filled from a container holding 2.4l of water?
- Petrol costs 90c per litre.
How much should 20 litres of petrol cost?
- How much would 1.8 litres cost at €2.50 per 300ml?
- Fruit juice costs €1.50 per 400ml.
What change did I get from €10.00 when I bought 2 litres of the juice? 

Answers ✓/✗

1.

2.

3.

4.

5.

6.

7.

8.

9.

10.

Total ✓