
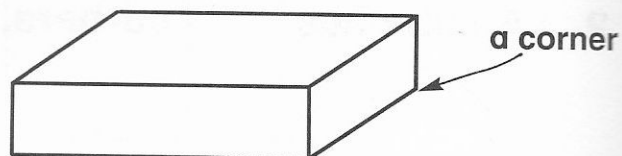


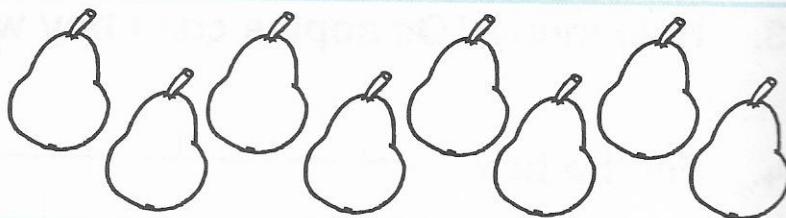
1. Colour $\frac{1}{4}$ of the biscuits.



2. A cuboid has corners.




3. Colour $\frac{1}{4}$ of this set.




4. $7 + 3 + 5 =$

5.

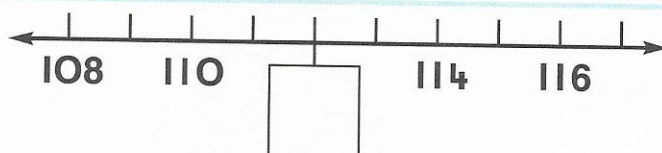


A quarter
past 8.



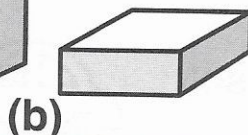
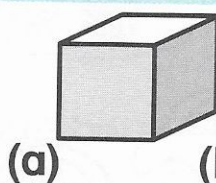


A quarter
past _____.


6. Fill in.



7. Which shape
has no corners?



8. How many



can I buy with



?

9. 8 is half of .

10. $5 + 3 + 7 =$

