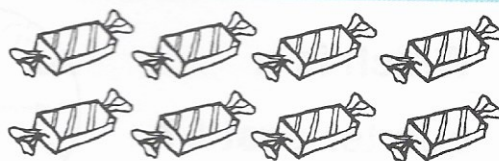




1. $\frac{1}{4}$ of 8 sweets = sweets




2. $100 + \text{} = 110$

3. Fill in the numbers.



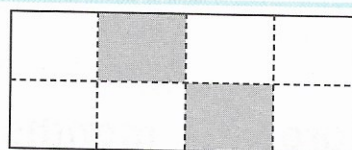
4. Which is a **sphere**?




5. How much have I? c



6. Which part is shaded, $\frac{1}{4}$ or $\frac{1}{2}$?



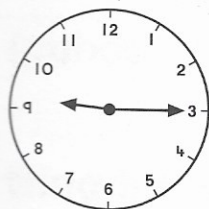
7.



Colour the coins you need.



8.



is _____ past _____.

9. The moon is a _____. (cube, sphere, cuboid)

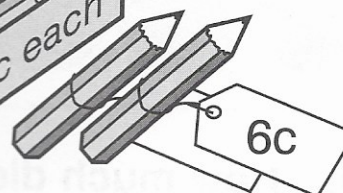

10. Amanda had 14c.

She bought **two** pencils.

What change did she get?



c



My Score

