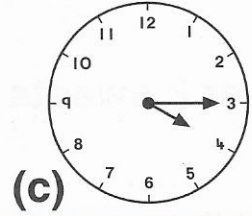
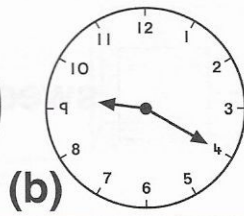
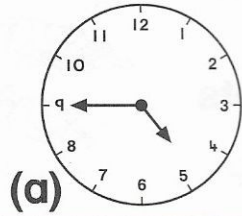
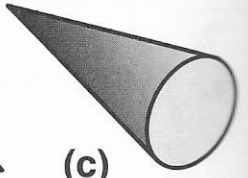
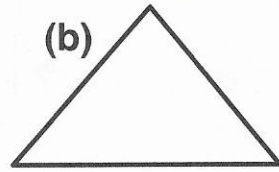
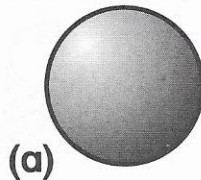


1. Which is a quarter past 4?

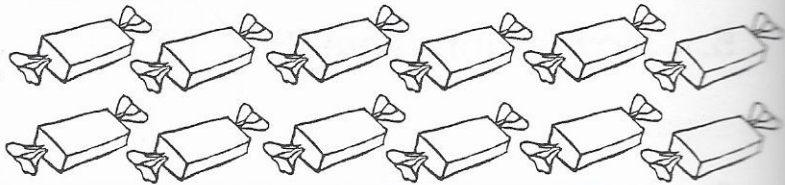



2. The farmer shared 12 apples equally among four children. How many did each child get?  c

3. Which is a cone?



4. Colour  $\frac{1}{4}$  of 12 sweets.



5. There are \_\_\_\_\_ months in a year. (7, 12 or 24)

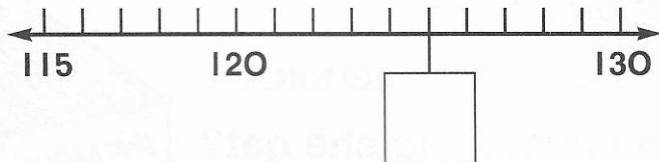
6. =  c

7. 40c = +  c +  c


8. Colour the part that is a cone.



9. Fill the box.



10. How much did I pay for a  c



and a ?

