




1.  +  = c

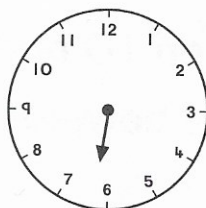
2. There are 17 children in a class.
8 are girls. How many boys are there?
 boys



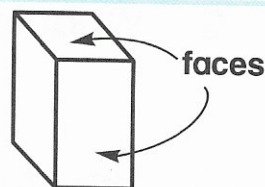
3. The **sum** of 5 and 3 is 8.
What is the **sum** of 9 and 7?

4. What is the **sum** of 11 and 9?


5. Show quarter past 6.




6. The **faces** on a cuboid are _____
(cubes, rectangles, triangles)



7. Ring the solids that can be **rolled**.



8. How many  can I buy with 40c?

9. Therese spent $\frac{1}{4}$ of her money.
How much did she spend?
 c



10. $17 - 9 =$

