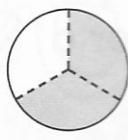
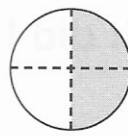




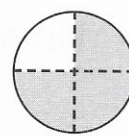
1. Which shape shows  
2 quarters shaded?



(a)



(b)




(c)

2.  $125 = 100 + 20 +$

3.  $125 = 1$  hundred,  tens and 5 units

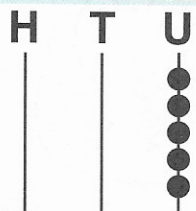
4. Two quarters can be written as  $\frac{2}{4}$ .

How would you write three quarters?



5. Complete.


125 is




6. Tom had 50c. He spent 20c in the shop.

How much had he left?  c

7. Colour in two squares  
to finish the pattern.




8. Colour the coins  
you need.



9.  $10 > 8$  means 10 is more than 8.

Is  $101 > 110$ ? (yes or no)



10. Is  $\frac{1}{2} > \frac{1}{4}$ ?

(yes or no)

