




1. How much did I pay for a  20 c and a  9 c ?
 c

2. $139 = 1$ hundred, _____ tens and _____ units

3. Colour $\frac{2}{4}$ of this shape. 

4. Is $\frac{2}{4} > \frac{1}{2}$? (yes or no)


5. How much have I?
 c



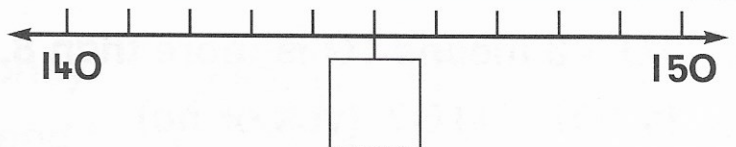
6. A bar of chocolate weighs 50 grams.
What will **two** bars weigh? grams

7. Mary had 20c and bought sweets for 11c.
What change did she get?
 c

8. Pat had 35c.
He bought a copy for 20c.
How much had he left? c



9. Fill the box.



10. Tom had 8c. How much **more** does he need to buy a copy that costs 20c? c

