

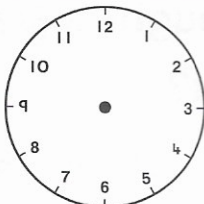


1. How much have I?

 c


2. What number comes after 189?

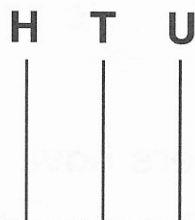
3. Show $\frac{1}{4}$ past 7.



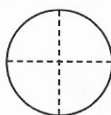
4. How many  coins make 30c?

5. 152 = _____ hundred, _____ tens and _____ units.

6. Show 152 on this abacus.



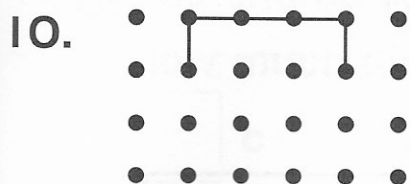
7. Colour $\frac{3}{4}$ of this circle.



8. Tom had 50c. He bought **two** copies for 20c each.

What change did he get? c

9. Fill in. 5, 10, _____, _____, _____, 30



Draw the other half.

My Score

