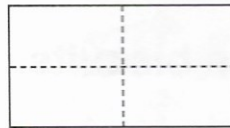
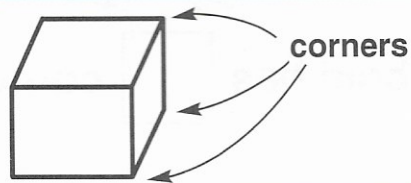




1. Colour  $\frac{1}{4}$  of this rectangle.

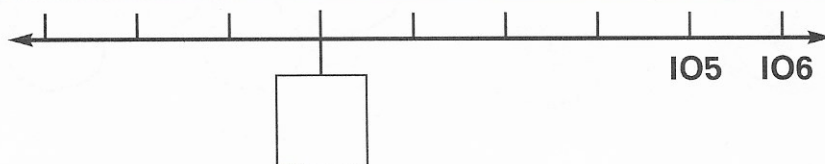


2. A cube has \_\_\_\_\_ corners.



3. How many 10c copies can I buy with 30c?

4. Fill the box.




5. How much did I pay for a 9c and 7c ?

c



and




?

6.  $101 = \square + 1$

7. How much have I?  c



8. Colour  $\frac{1}{4}$  of this set.



9. Ann had 16c.

She lost 8c.

How much had she left?  c



10. Mum shared 16c equally between Pat and Ann.

How much did they each get?

c

My Score

