

Write the correct number in each box.

1.

h	t	u
1	3	5

2.

h	t	u
1	5	8

3.

h	t	u
2	7	3

4.

h	t	u
1	2	8

5.

h	t	u
1	4	0

6.

h	t	u
1	7	2

7.

h	t	u
1	4	8

8.

h	t	u
1	2	9

9.

h	t	u
1	3	3

The biggest number is 273.

The smallest number is 128.

Write the correct number in each box.

1.

h	t	u
1	5	2

2.

h	t	u
1	7 4	

3.

h	t	u
1	5	8

4.

h	t	u
1	2	8

5.

h	t	u
1	4	9

6.

h	t	u
1	0	5

7.

h	t	u
1	8	1

8.

h	t	u
1	5	5

9.

h	t	u
1	2	2

10.

h	t	u
1	4	0

11.

h	t	u
1	6	1

12.


h	t	u
1	0	9

The biggest number of straws = 181


The smallest number of crayons = 105

Numbers beyond 100

10



=



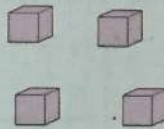

10 tens

make

100

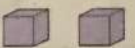
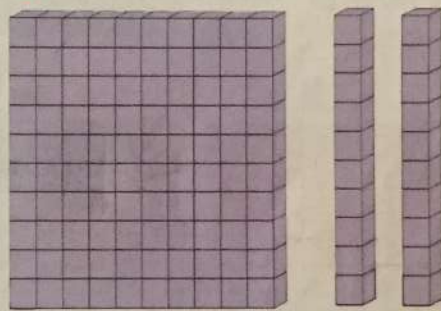
Write the correct number in each box.

1.




h	t	u
1	2	4

2.



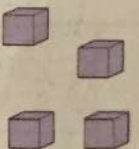

h	t	u
1	2	2

3.



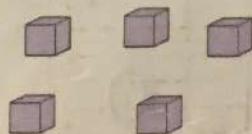

h	t	u
1	3	1

4.




h	t	u
1	3	4

5.



h	t	u
1	1	5

6.


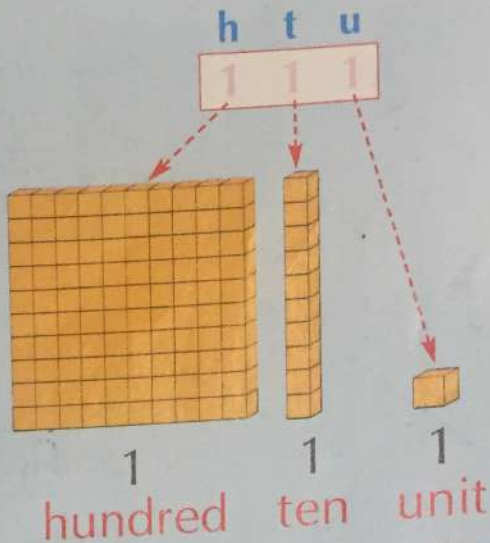


h	t	u
1	3	0


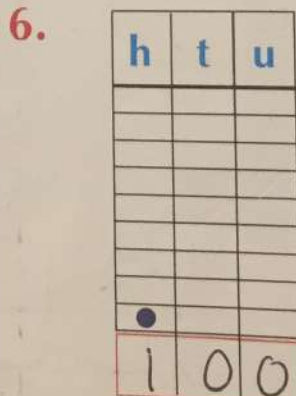
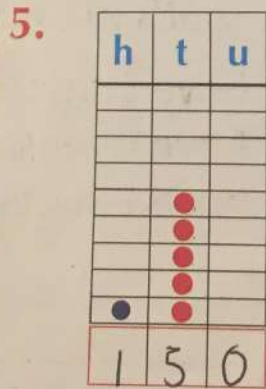
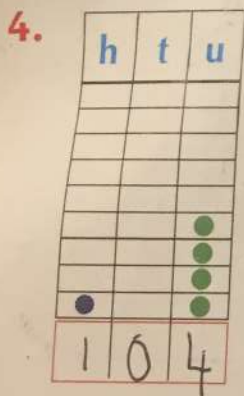
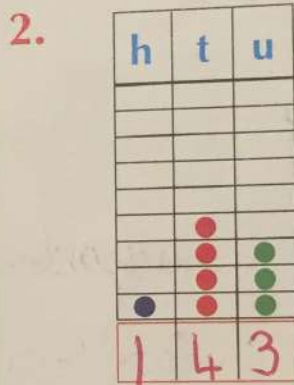
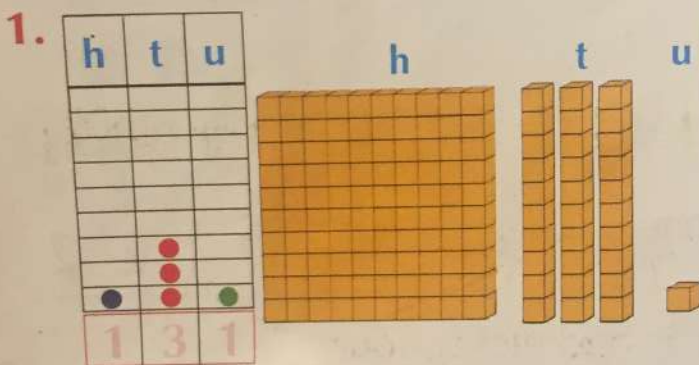
Numbers beyond 100

This is the number
one hundred and eleven.

The **1s** are not of equal value.

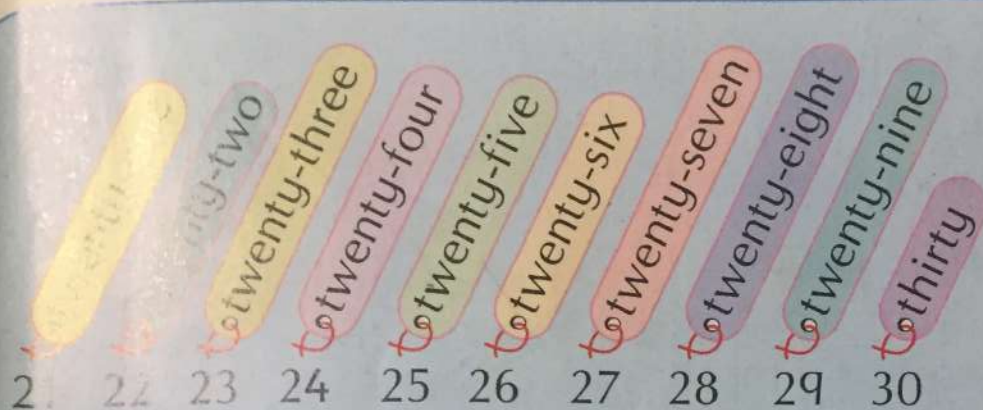


Use blocks to show each number on the notation board.



- | | | | | |
|-----------------------|-----|-----|-----|-----|
| 8. Ring the tens. | 134 | 171 | 102 | 56 |
| 9. Ring the hundreds. | 112 | 169 | 105 | 134 |
| 10. Ring the units. | 142 | 28 | 110 | 122 |

Number words



40	to forty
50	to fifty
60	to sixty
70	to seventy
80	to eighty
90	to ninety
100	to one hundred

1. Write the numbers.

22 to twenty-two

31 to thirty-one

47 to forty-seven

53 to fifty-three

64 to sixty-four

75 to seventy-five

152 to one hundred and fifty-two

184 to one hundred and eighty-four

1. What's my number?

I have 1 hundred.

I have 6 tens.

I have 3 units.

163

2. What's my number?

I have 1 hundred.

I have 5 tens.

I have 8 units.

158

3. What's my number?

I have 1 hundred.

I have 7 tens.

I have 4 units.

174

4. What's my number?

I have 1 hundred.

I have 2 tens.

I have 9 units.

129