

10. What is the perimeter of a regular pentagon which measures 12cm on one side?



Score

**Test 84**

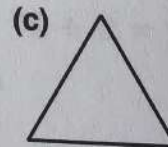
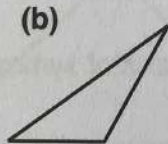
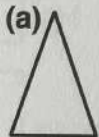


1. What change will you get from one euro if you buy three packets of crisps at 30 cent each?
2. Round 6245 to its nearest thousand.
3. John was born in 1970. What age is he now?
4. Sarah got 5 'sums' right out of 20. What fraction (of all the sums) did she get right?
5. What is the cost of two pencils if 5 cost 60 cent?
6. Put in order of size, starting with the smallest: 3.7, 0.7, 4.1.
7. This magic square adds up to 27 in each direction. Complete.

10		
8	9	



8. A bottle of orange holds  $\frac{1}{4}$  litre. How many litres are needed to fill 8 bottles?
9. Two lengths, each 75cm, were cut from a ribbon two metres long. What length of ribbon was left?
10. Which of these triangles is a **scalene** triangle?



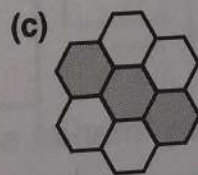


Answer

- 1.
- 2.
- 3.
- 4.
- 5.
- 6.
- 7.
- 8.
- 9.
- 10.

Score



1. What three euro notes make €20?
2. How many angles are there inside a pentagon?
3. How much shorter than 2 metres is a man who is 1m 80cm tall?
4. What number is  $\frac{4}{10}$  s more than 1.8?
5. How many metres in half a kilometre?  
(Remember: 1000m = 1 kilometre.)
6. Noel was born on Christmas Day. His friend Joe was born a week later. On what date was Joe born?
7.  $\frac{1}{100}$  can be written as 0.01.  
Write  $\frac{3}{100}$  as a decimal.
8. Tom bought a comic book in the shop.  
If he got 11c change from €2, how much was the comic?
9. The sum of three numbers is 30. If two of the numbers are 8 and 9, what is the other?
10. Which shape shows  $\frac{1}{2}$  shaded?



Answer

1.	
2.	
3.	
4.	
5.	
6.	
7.	
8.	
9.	
10.	

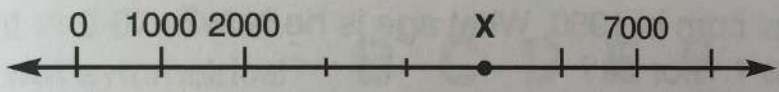
Score




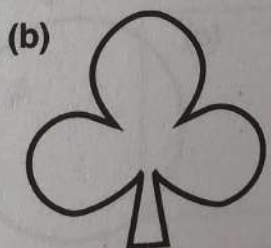

Score



1. What three euro notes make €50?
2. Write  $\frac{9}{100}$  as a decimal.
3. What is the perimeter of a rectangle which has a length of 10cm and a width of 8cm?
4. What is the cost of three colouring books at 99 cent each?
5. What is the value of X?



6. Take one thousand from the highest number:  
8971, 9871, 7987.
7. In a school there are two girls to every one boy.  
There are 100 girls. How many boys are there?
8. After running 1500m of a 2km race, how far have I still to go?
9. What is the price of 3 tickets if 5 cost €2?
10. Which picture is symmetrical?



Answer

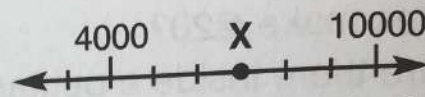
1.	
2.	
3.	
4.	
5.	
6.	
7.	
8.	
9.	
10.	

Score

# Test 87



1. What number is shown at X?



2. How would 3 minutes to midday be shown on a digital clock?

3. What four euro notes make €100?

4. Write  $\frac{7}{100}$  as a decimal.

5. A table and three chairs cost €400.

If each chair cost €50, how much did the table cost?

6. You get two "throws" for 50 cent.


How many will you get with a 2 euro coin?

7. Draw in the axis of symmetry.

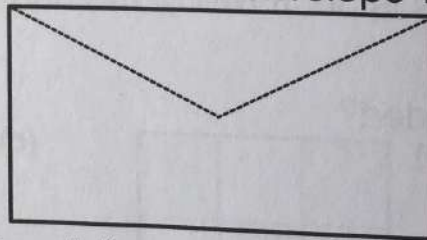


8. A football match lasts 60 minutes. If it starts at 3.15, and 5 minutes are allowed for a half time break, at what time should it finish?

9. How many square stamps would cover this envelope?



stamp



10. What is the cost of ten "marker sets" at 99 cent each?

Answer

1.

2.

3.

4.

5.

6.

7.

8.

9.

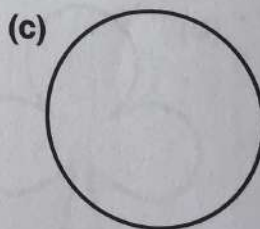
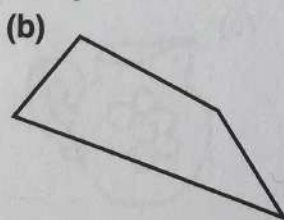
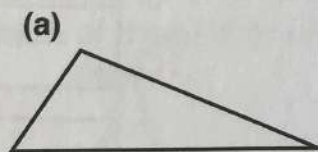

10.

Score



# Test 88

1. What fraction of €2 is 50 cent?
2. How many 50g packets of seed can I fill from  $\frac{1}{2}$ kg of seed?  
(Remember: 1000g = 1kg.)
3. What is the perimeter of a rectangle which is 15cm long and 10cm wide?
4. If six copies cost €1.80, what do three copies cost?
5. My grandfather was born in 1950. What age is he now?
6. Is 0.01 the same as  $1\frac{1}{10}$  or  $\frac{1}{100}$ ?
7. How many squares () would cover this area?
8. Every 5 miles is the same as 8km.  
How many km have I gone after 10 miles?
9. What coin is  $\frac{1}{100}$  of €1?
10. Which of these shapes is symmetrical?



Answer

1.
2.
3.
4.
5.
6.
7.
8.
9.
10.

Score