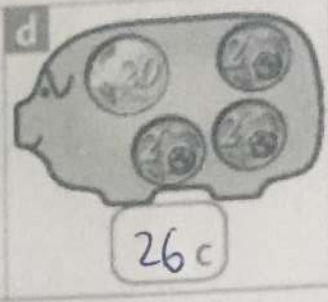
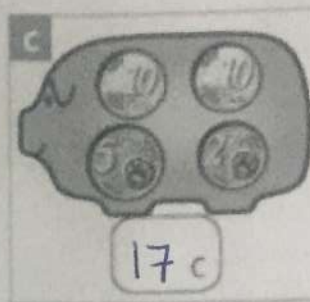
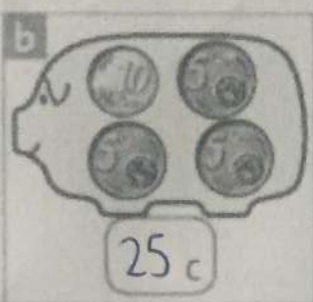
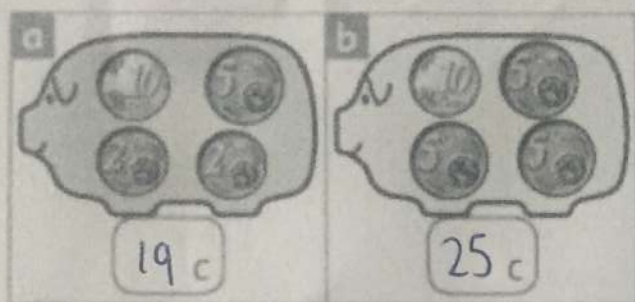


Tuesday - 23rd February

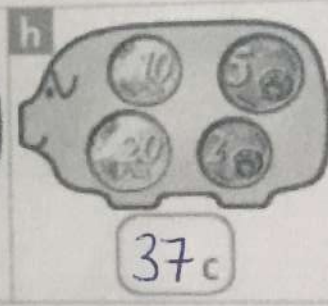
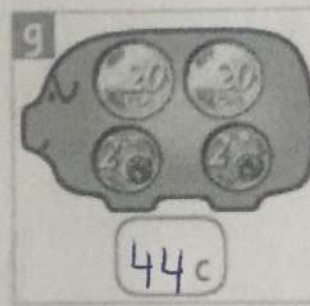
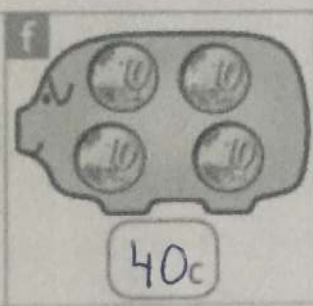
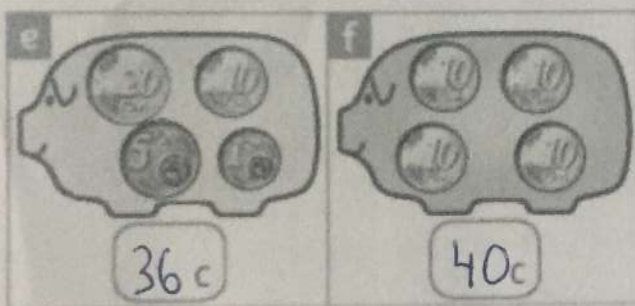
Money 1 – Coins up to

1. Write the amount of money that is in each piggy bank.
Then compare which piggy bank has more and by how much.



Piggy bank b has 6c more.

Piggy bank d has 9c more.



Piggy bank f has 4c more.

Piggy bank g has 7c more.

2. Add the coins. Complete these sentences.

Alan has  42c

Ann has  31c

Alan has 11c more than Ann

Ann has 11c less than Alan

3. Complete the table.

I had	20c	30c	25c	34c	40c	44c	48c	36c	49c	37c
I spent	13c	21c	19c	28c	32c	20c	15c	25c	30c	12c
I have left	7c	9c	6c	6c	8c	24c	33c	11c	19c	25c

Money: coins up to 50c

1. How much money is there in each box?



64c



36c



40c

2. How much money is there in each purse?



80c



67c



56c



67c



80c



88c



80c



80c

Write the correct coins in each box.

(a) 77c →

50c	20c	5c	2c
-----	-----	----	----

(c) 62c →

50c	5c	5c	2c
-----	----	----	----

77c →

50c	10c	10c	5c	2c
-----	-----	-----	----	----

62c →

20c	20c	10c	10c	2c
-----	-----	-----	-----	----

95c →

50c	20c	20c	5c
-----	-----	-----	----

(d) 90c →

50c	10c	10c	20c
-----	-----	-----	-----

95c →

20c	20c	20c	10c	5c
-----	-----	-----	-----	----

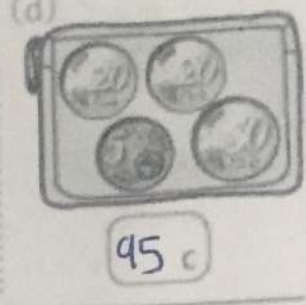
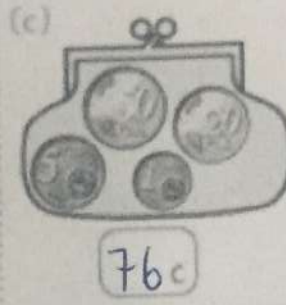

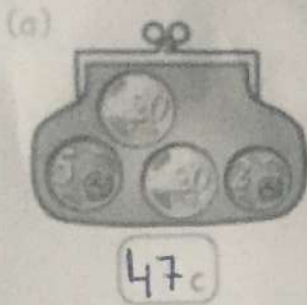
90c →

50c	20c	5c	5c	5c
-----	-----	----	----	----

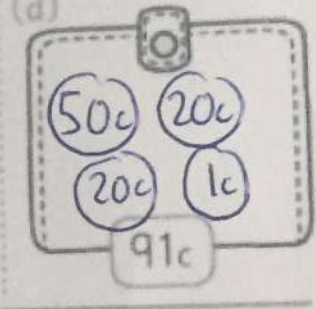
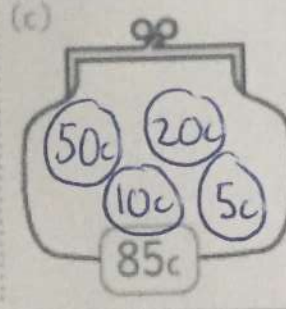
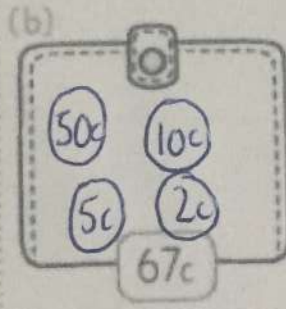
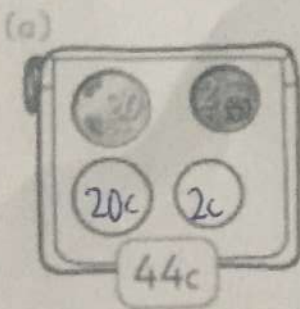
Thursday - 25th February

Money 1 - Coins up to

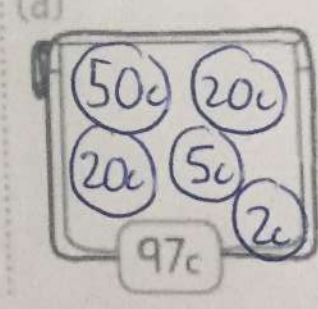
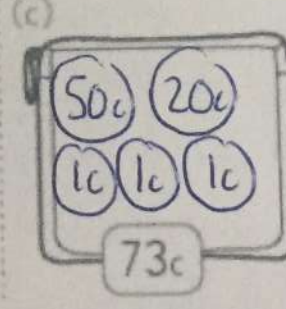
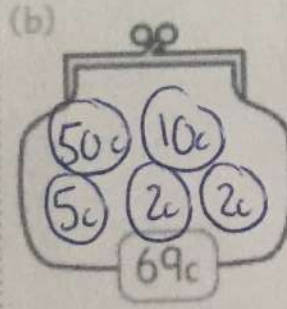
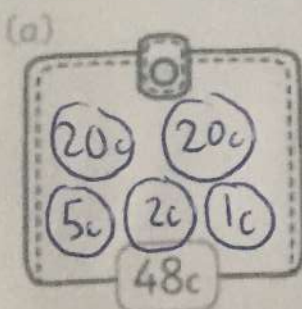
1. How much money is there in each purse? Write.













2. Draw the least number of coins needed to make these amounts.








3. Make each of these amounts using five coins. Draw.



4.   Alan has  . Alison has  .
How much money have they between them? 95c

5. Karl has   .
How much more does he need to buy the melon? 10c  45c

Challenge Rachel has   . Rita has .
How much more do they need to buy the pineapple? 15c 

Money: €1 (euro)

These coins are real size.



Make €1. Write the correct amount in each box.

$$€1 = 50c + 10c + 10c + 10c + 10c + 10c$$

$$€1 = 20c + 20c + 20c + 20c + 20c$$

$$€1 = 50c + 20c + 20c + 10c$$

$$€1 = 20c + 20c + 20c + 20c + 10c + 10c$$

$$€1 = 50c + 20c + 10c + 10c + 5c + 5c$$