


# Test 52



1. What three coins make €0.75?
2. What is the missing term: 996, 997, , 999?
3. What is  $\frac{1}{2}$  past 12 on a digital clock?
4. How many days in 3 weeks?
5. Tom got 10 spellings right out of 20.  
What fraction of the spellings did he get right?
6. Which of these figures would look exactly the same in a mirror: 2, 4, 6, 8?
7. Dad weighs 80kg and Mum 65kg.  
How much lighter is Mum?
8. If today is Wednesday, what day will it be in 8 days' time?
9. How many centimetres long is this pin?



10. This magic square adds up to 15 in each direction. Complete it.

	8	6
4		


Answer

1.	
2.	
3.	
4.	
5.	
6.	
7.	
8.	
9.	
10.	

Score

--

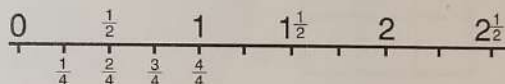
## Test 53

- I had 50c and bought an ice pop for 15 cent.  
What change did I get?
- What four coins make 50 cent?
- $\frac{1}{4}$  of a prize is €8. What is the whole prize?
- How many centimetres long is this screw?  

- What is a quarter past 2 on a digital clock?
- What are the next two odd numbers: 1, 3, 5, 7, \_\_, \_\_?
- What change will I get from €2 if I buy 2 bottles of orange at 50 cent each?
- Which of these 3-D shapes (solids) have **curved** faces?  
(Remember: 'curved' means rounded.)



9. What is the missing term: 992, 994, \_\_, 998?

10.  $2 = \frac{\square}{4}$



Answer

1.  
2.  
3.  
4.  
5.  
6.  
7.  
8.  
9.  
10.


Score

## Test 54

- Take 9 from 900.
- What is 11 o'clock on a digital clock?
- Is this tack  $\frac{1}{2}$  cm, 1 cm or  $1\frac{1}{2}$  cm long?



4. What fraction of this shape is shaded?



- Ciara is 4 years younger than her brother.  
Ciara is 7 years old.  
How old is her brother?
- What number is halfway between 5 and 15?
- $100 \times 1 =$
- If milk is 75 cent a litre, how much will I pay for 2 litres?
- What three coins make €1.10?
- A car has 43 litres of petrol. If it can hold 60 litres altogether, how many more litres will fill it?

Answer

1.  
2.  
3.  
4.  
5.  
6.  
7.  
8.  
9.  
10.

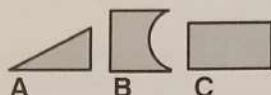
Score

## Test 55

- What is the missing term: 980, 985, \_\_, 995?
- A bag of coal weighs 50kg. What will 4 bags weigh?
- What time is 5 minutes later than midday?
- What fraction of this shape is shaded?



- 100 cm make 1 metre. How many centimetres in 2m?
- Which two of these numbers add up to 100: 40, 50, 60, 70?
- Which shape has 2 right angles only?



- How many 10 cent toffee bars can I buy with 60 cent?
- $2 \times 4 \times 5 = 40$ . What is the value of  $5 \times 2 \times 4$ ?
- This magic square adds up to 15 in each direction. Complete it.

4	7	
	5	

Answer

1.

2.

3.

4.

5.

6.

7.

8.


9.

10.

Score

## Test 56

- How much are 2 oranges at 25 cent each?
- Add 2 to 997.
- What time is 5 minutes earlier than midnight?
- What fraction of this shape is shaded?



- Which is the odd number: 20, 21, 22?
- How many centimetres in a  $\frac{1}{2}$  metre?
- If today is Friday, what day was it seven days ago?
- How many right angles has a blank page?
- What is the next term: 8, 16, 24, \_\_?
- I had (1€) and bought a drink for 55c. What change did I get back?

Answer

1.

2.

3.

4.

5.

6.

7.

8.

9.

10.

Score